




EscapeWarsaw.com



## On the 4th Day of Hunting: Sum Shopping List


Mrs Claus went shopping for Christmas dinner, but cannot find her receipt. We know that she spent **\$41.72** on 6 different items. Can you figure out exactly what she bought?



\$25.25 (A)



\$23.45 (S)



\$33.25 (I)



\$3.42 (T)



\$1.27 (R)



\$1.33 (J)



\$2.44 (H)




\$1.89 (Y)



\$0.82 (L)



\$0.89 (L)



\$0.24 (E)



\$2.43 (C)